

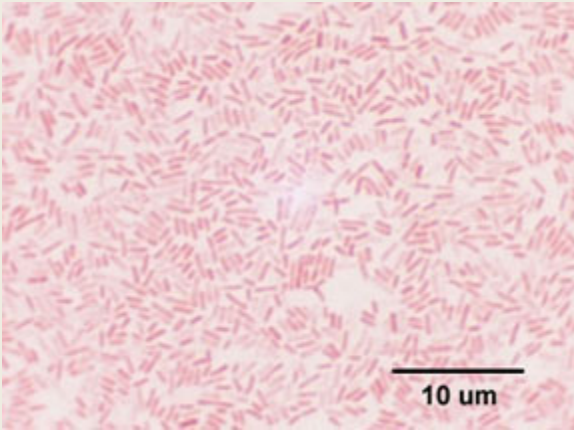
1. What best describes this bacterium?

- A. spirillum
- B. spirochete
- C. coccus
- D. vibrio



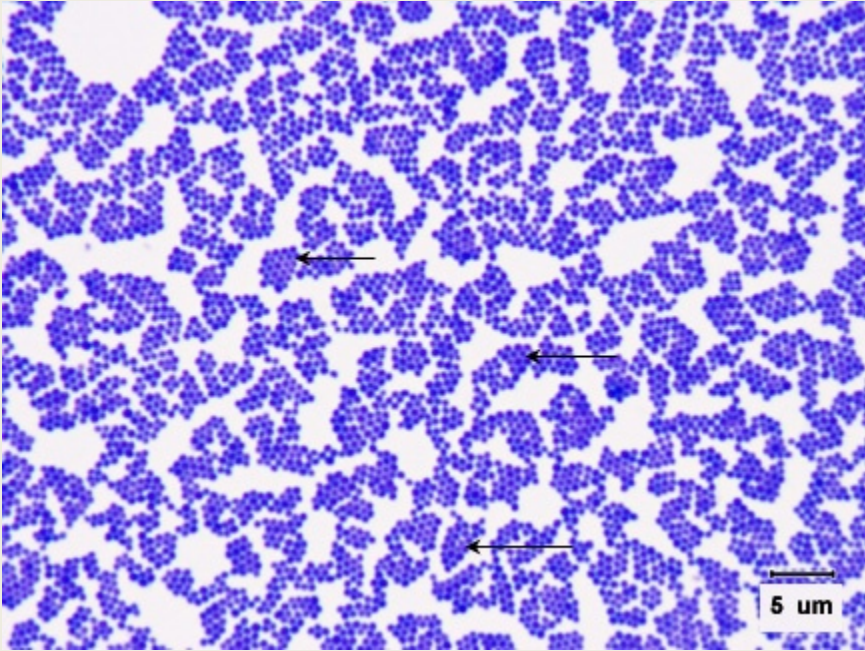
2. What best describes this bacterium?

- A. staphylococcus
- B. streptobacillus
- C. spirillum
- D. streptococcus



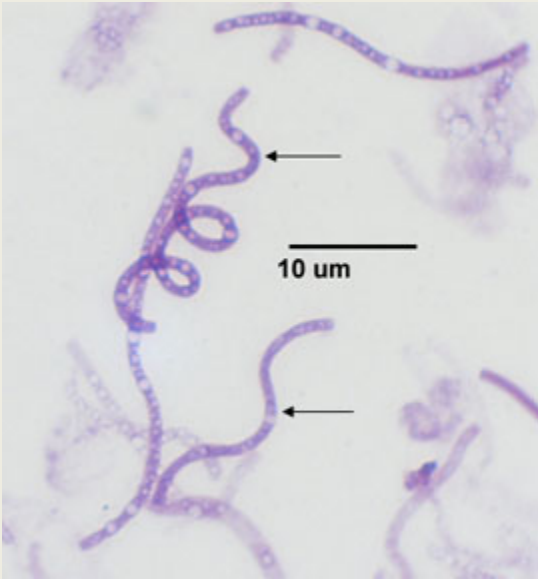
3. What is the shape of this bacterium?

- A. bacillus
- B. spiral
- C. coccus



4. What best describes this bacterium?

- A. diplococcus
- B. streptococcus
- C. tetrad
- D. staphylococcus



5. What best describes this bacterium?

- A. spirillum
- B. spirochete
- C. streptococcus
- D. vibrio